




Almost the New Year

Name _____

Score _____


NY:04

Look at each clock and write the time. Also, write how much longer it's almost the New Year comes.




Time : _____ pm

How long until the new year?



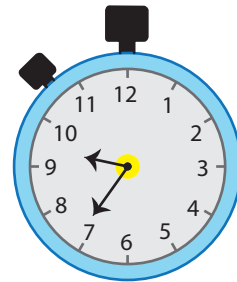
Time : _____ pm

How long until the new year?



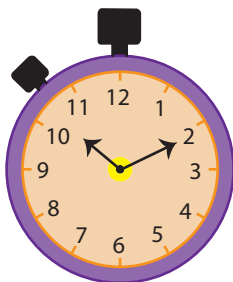
Time : _____ pm

How long until the new year?




Time : _____ pm

How long until the new year?



Time : _____ pm

How long until the new year?



Time : _____ pm

How long until the new year?



Almost the New Year


Name _____

Score _____

Answer key

NY:04


Look at each clock and write the time. Also, write how much longer it's almost the New Year comes.



Time : **11:40** pm

How long until the new year?


20 minutes



Time : **10:00** pm

How long until the new year?

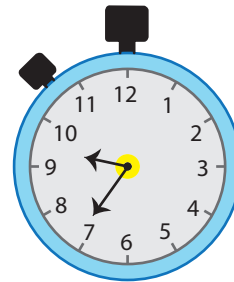
2 hours



Time : **11:15** pm

How long until the new year?

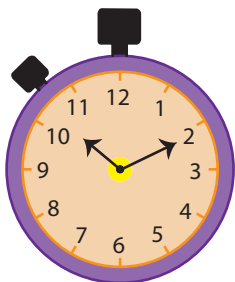
45 minutes



Time : **9:35** pm

How long until the new year?


2 hours 25 minutes



Time : **10:10** pm

How long until the new year?

1 hour 50 minutes



Time : **11:55** pm

How long until the new year?

5 minutes