



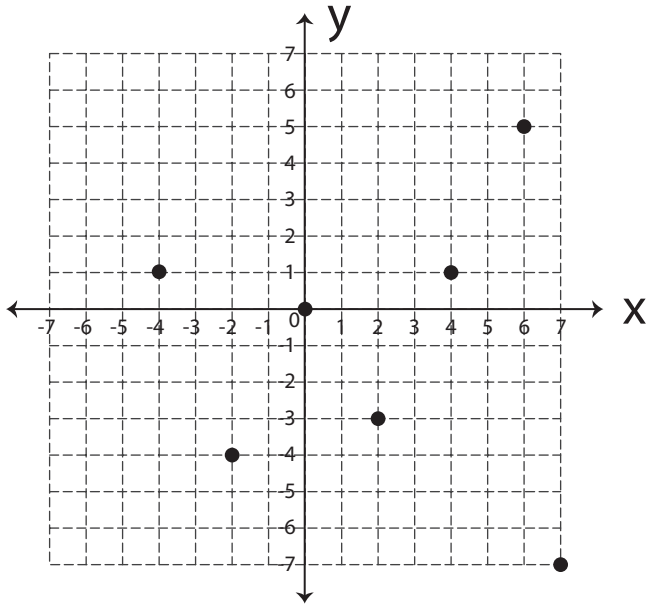
# Domain or Range

Name \_\_\_\_\_

Score \_\_\_\_\_

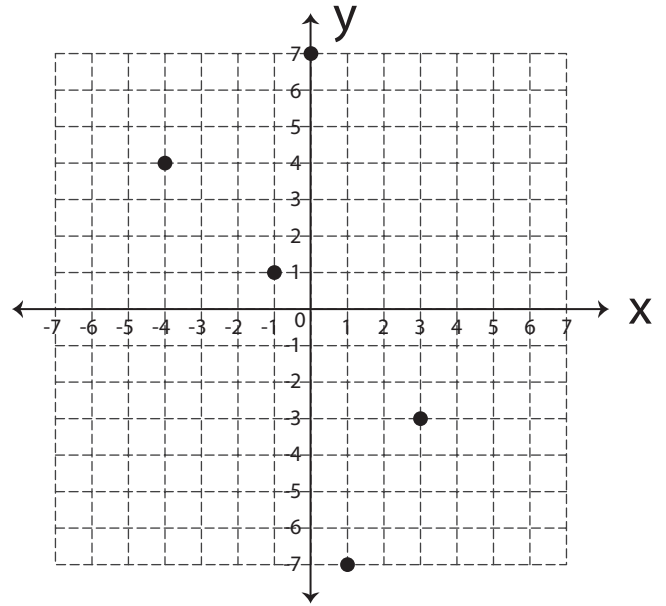
DR:04

1) What is the range of this function?



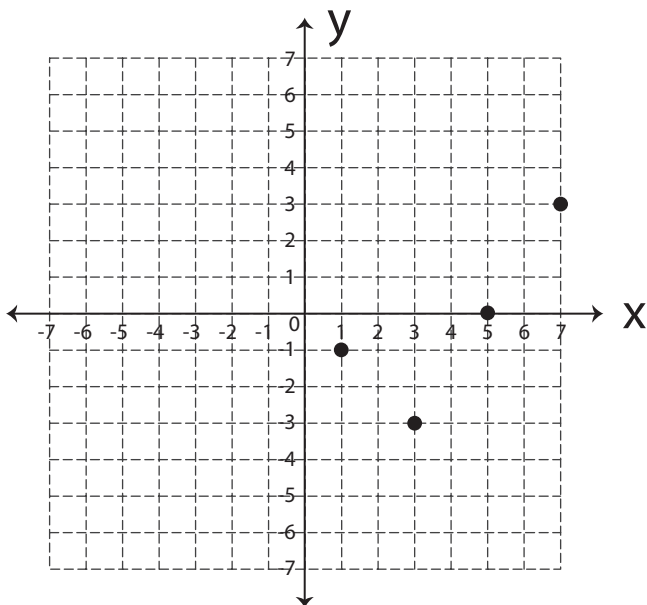
- {-2, 0, 1, 2, 4}
- {-4, -2, 0, 2, 4, 6, 7}
- {-7, -4, -3, 0, 1, 5}

2) What is the domain of this function?



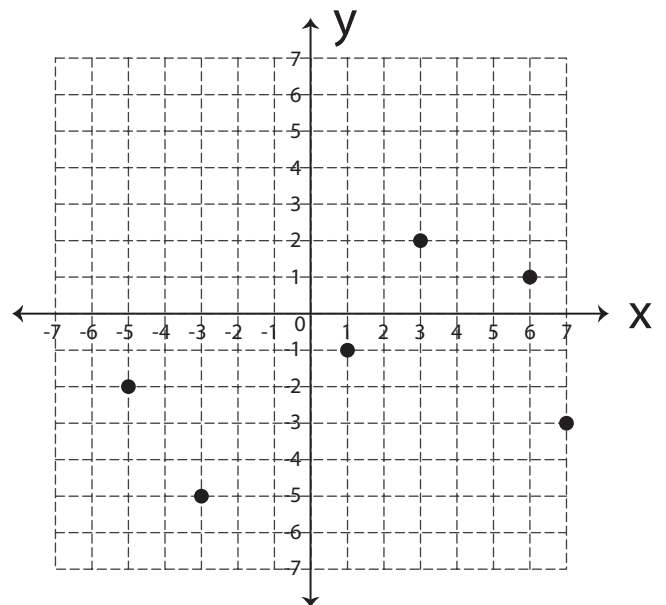
- {-3, -1, 1, 3, 4}
- {-4, -1, 0, 1, 3}
- {-7, -3, 1, 4, 7}

3) What is the domain of this function?



- {1, 3, 5, 7}
- {2, 3, 4}
- {-3, -1, 0, 3}

4) What is the range of this function?



- {-5, -4, -3, -1, 0, 1}
- {-5, -3, -2, -1, 1, 2}
- {-5, -3, 1, 3, 6, 7}



# Domain or Range

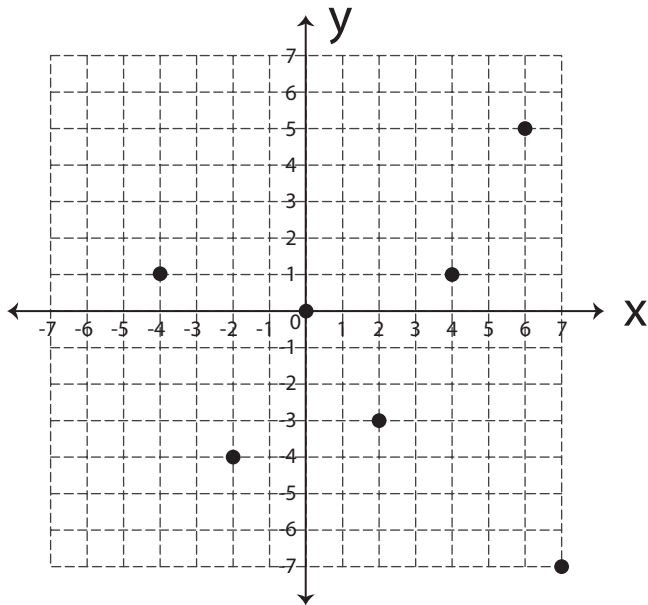
Name \_\_\_\_\_

Score \_\_\_\_\_

## Answer key

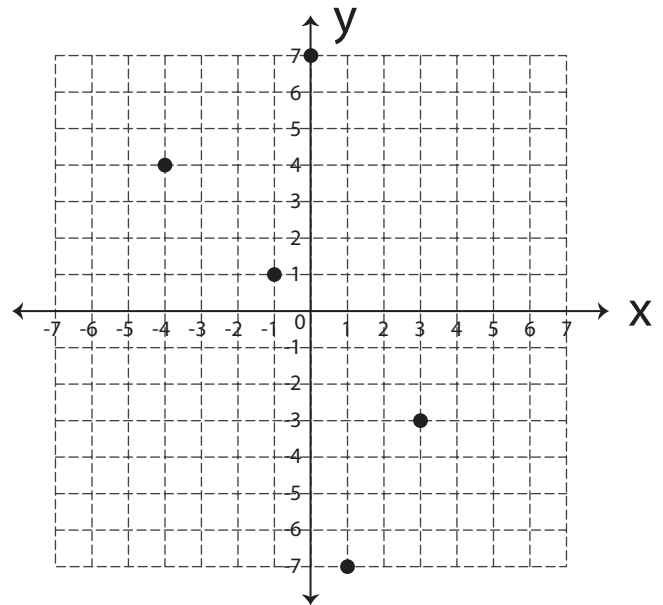
DR:04

1) What is the range of this function?



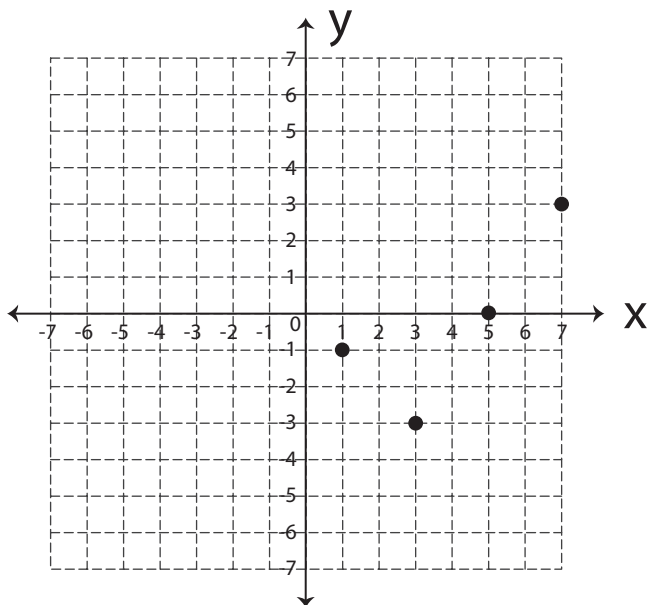
- {-2, 0, 1, 2, 4}
- {-4, -2, 0, 2, 4, 6, 7}
- {-7, -4, -3, 0, 1, 5}

2) What is the domain of this function?



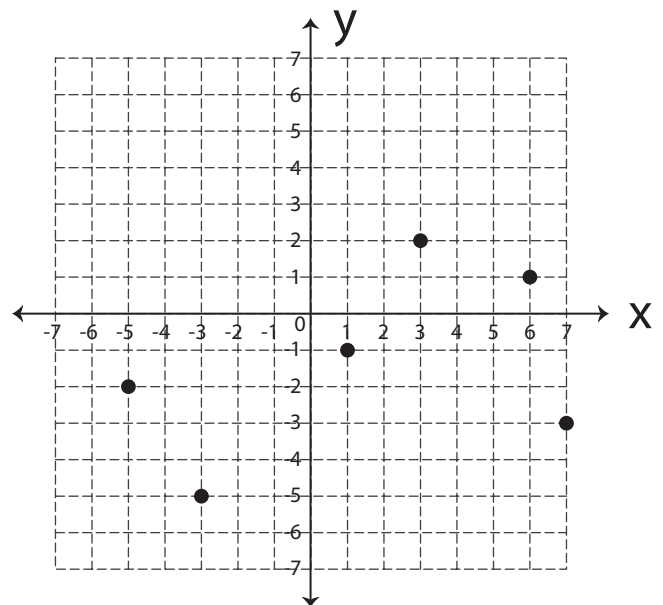
- {-3, -1, 1, 3, 4}
- {-4, -1, 0, 1, 3}
- {-7, -3, 1, 4, 7}

3) What is the domain of this function?



- {1, 3, 5, 7}
- {2, 3, 4}
- {-3, -1, 0, 3}

4) What is the range of this function?



- {-5, -4, -3, -1, 0, 1}
- {-5, -3, -2, -1, 1, 2}
- {-5, -3, 1, 3, 6, 7}