



# Circumference of circles

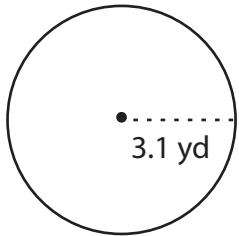
Name \_\_\_\_\_

Score \_\_\_\_\_

CC:09

Find the circumference of the circle. (Use  $\pi = \frac{22}{7}$  or 3.14)

Example 1

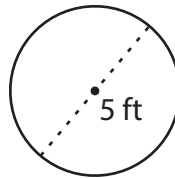


Circumference of circle =  $2\pi r$

Radius (r) = 3.1 yd

Circumference =  $2 \times 3.14 \times 3.1$   
**= 19.47 yd**

Example 2



Diameter (d) =  $2 \times$  Radius (r)

Circumference of circle =  $2\pi r$  or  $\pi d$

diameter = 5 ft

Circumference =  $\pi \times d$

=  $\pi \times 5$

**= 15.7 ft**

Find the circumference and radius/diameter of each circle (Use  $\pi = \frac{22}{7}$  or 3.14). Round the answer to the two decimal places.

1) Radius = 4.9 yd

Diameter = \_\_\_\_\_ in

Circumference = \_\_\_\_\_ in

2) Radius = 14 yd

Diameter = \_\_\_\_\_ ft

Circumference = \_\_\_\_\_ ft

3) Diameter = 19 yd

Radius = \_\_\_\_\_ yd

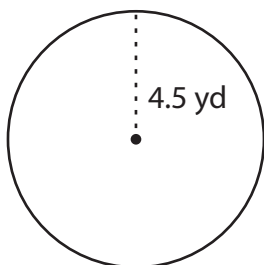
Circumference = \_\_\_\_\_ yd

Complete the table.

| Q.No | Radius | Diameter | Circumference |
|------|--------|----------|---------------|
| 1)   | 2.5 yd |          |               |
| 2)   | 13 in  |          |               |
| 3)   |        | 3.4 ft   |               |
| 4)   |        | 16 ft    |               |
| 5)   | 3 yd   |          |               |

Find the circumference of each circle (Use  $\pi = 3.14$ ). Round the answer to the tenth place.

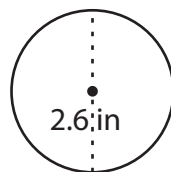
1)



Diameter = \_\_\_\_\_ yd

Circumference = \_\_\_\_\_ yd

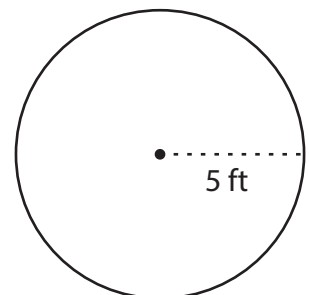
2)



Radius = \_\_\_\_\_ in

Circumference = \_\_\_\_\_ in

3)



Diameter = \_\_\_\_\_ ft

Circumference = \_\_\_\_\_ ft



# Circumference of circles

Name \_\_\_\_\_

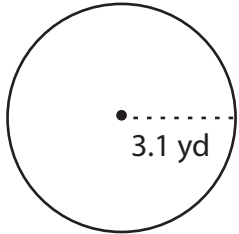
Score \_\_\_\_\_

## Answer key

CC:09

Find the circumference of the circle. (Use  $\pi = \frac{22}{7}$  or 3.14)

Example 1

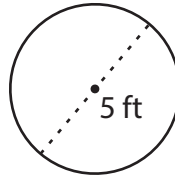


Circumference of circle =  $2\pi r$

Radius (r) = 3.1 yd

Circumference =  $2 \times 3.14 \times 3.1$   
**= 19.47 yd**

Example 2



Diameter (d) =  $2 \times$  Radius (r)

Circumference of circle =  $2\pi r$  or  $\pi d$

diameter = 5 ft

Circumference =  $\pi \times d$

=  $\pi \times 5$

**= 15.7 ft**

Find the circumference and radius/diameter of each circle (Use  $\pi = \frac{22}{7}$  or 3.14). Round the answer to the two decimal places.

1) Radius = 4.9 yd

Diameter = 9.8 in

Circumference = 30.77 in

2) Radius = 14 yd

Diameter = 28 ft

Circumference = 87.92 ft

3) Diameter = 19 yd

Radius = 9.5 yd

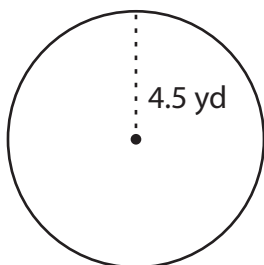
Circumference = 59.66 yd

Complete the table.

| Q.No | Radius        | Diameter     | Circumference   |
|------|---------------|--------------|-----------------|
| 1)   | 2.5 yd        | <b>5 yd</b>  | <b>15.7 yd</b>  |
| 2)   | 13 in         | <b>26 in</b> | <b>81.64 in</b> |
| 3)   | <b>1.7 ft</b> | 3.4 ft       | <b>10.68 ft</b> |
| 4)   | <b>8 ft</b>   | 16 ft        | <b>50.24 ft</b> |
| 5)   | 3 yd          | <b>6 yd</b>  | <b>18.84 yd</b> |

Find the circumference of each circle (Use  $\pi = 3.14$ ). Round the answer to the tenth place.

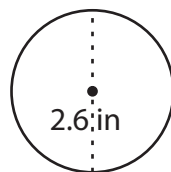
1)



Diameter = 9 yd

Circumference = 28.26 yd

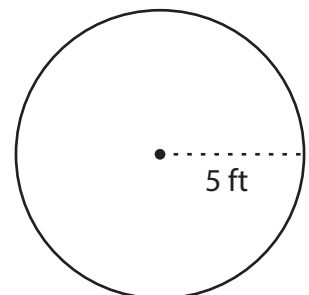
2)



Radius = 2.6 in

Circumference = 8.16 in

3)



Diameter = 5 ft

Circumference = 15.7 ft