



# Graphing a Line

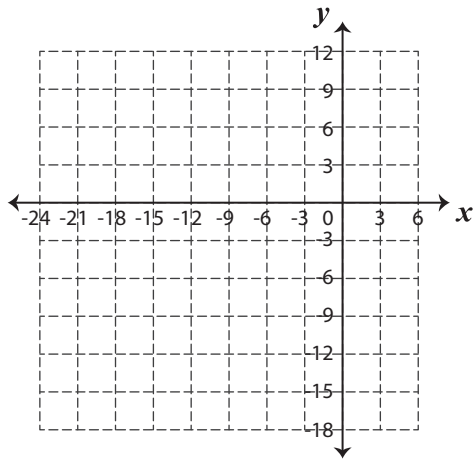
Name \_\_\_\_\_

Score \_\_\_\_\_

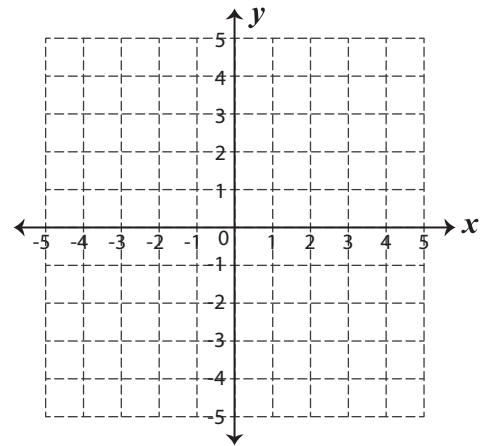
GL:10

Plot the given points in a graph and draw a line through it.

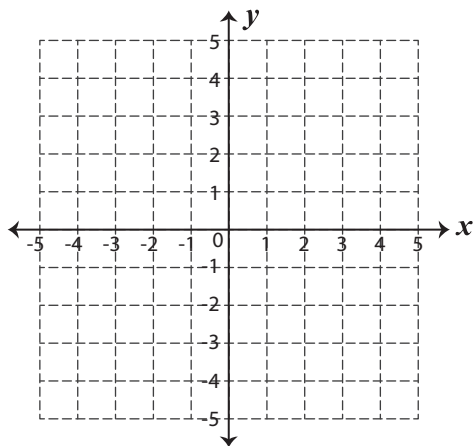
1)  $(-15, 9)$  and  $(6, -12)$



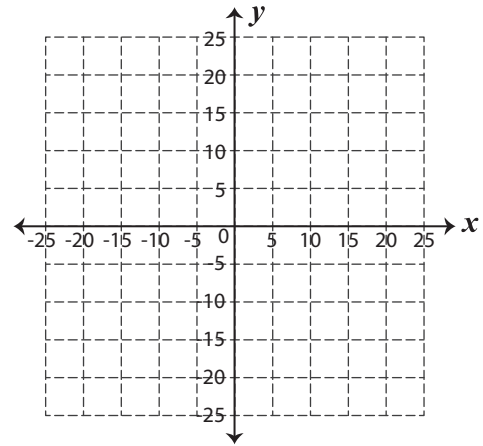
2)  $(0, 4)$  and  $(2, 0)$



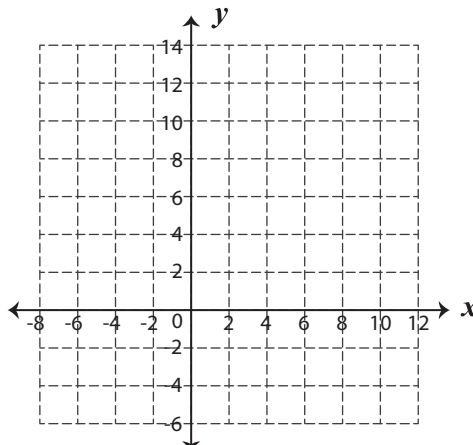
3)  $(-1, 3)$  and  $(4, 1)$



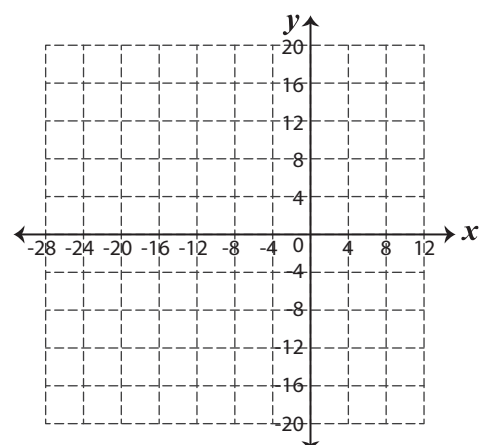
4)  $(-5, -5)$  and  $(-20, -15)$



5)  $(2, 10)$  and  $(6, -4)$



6)  $(-24, 16)$  and  $(-8, -12)$





# Graphing a Line

Name \_\_\_\_\_

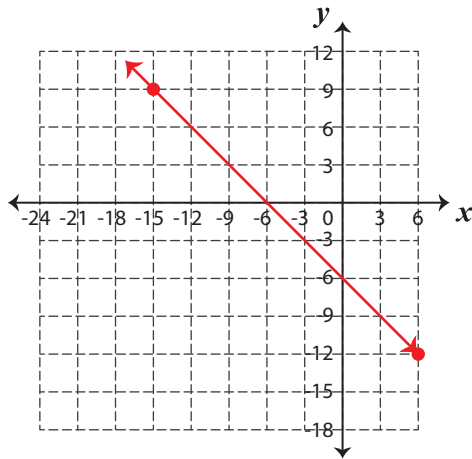
Score \_\_\_\_\_

## Answer key

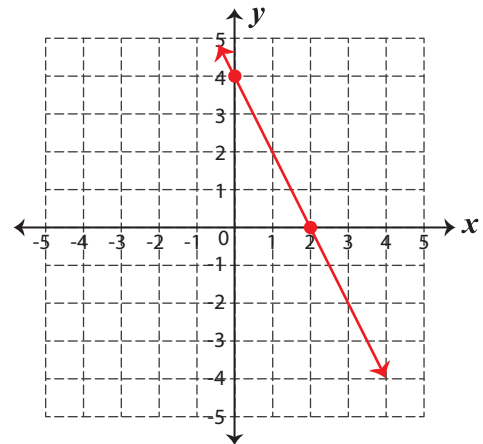
GL:10

Plot the given points in a graph and draw a line through it.

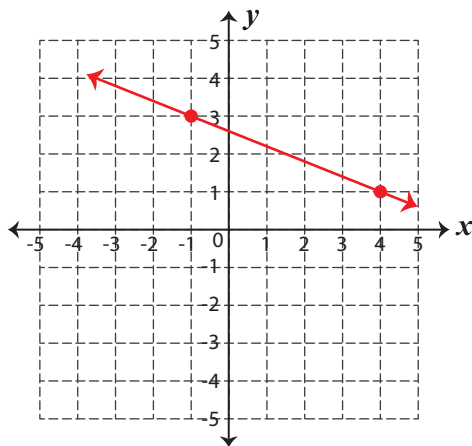
1)  $(-15, 9)$  and  $(6, -12)$



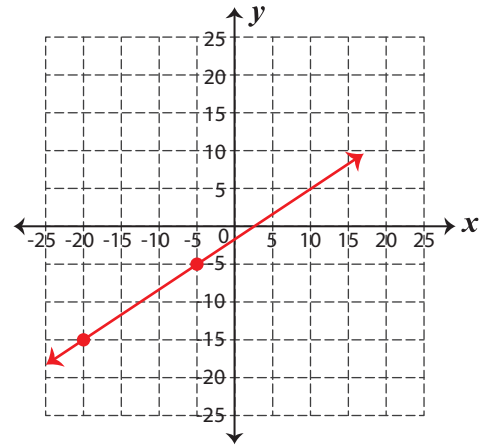
2)  $(0, 4)$  and  $(2, 0)$



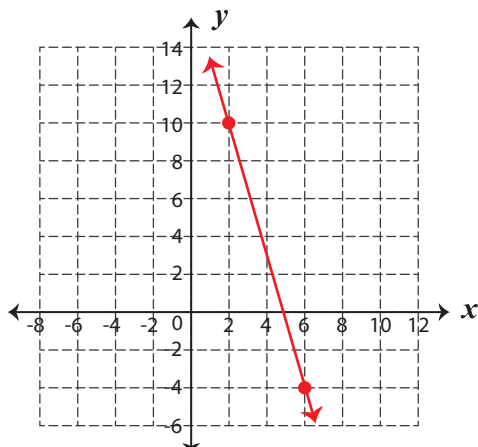
3)  $(-1, 3)$  and  $(4, 1)$



4)  $(-5, -5)$  and  $(-20, -15)$



5)  $(2, 10)$  and  $(6, -4)$



6)  $(-24, 16)$  and  $(-8, -12)$

