



MATCHING PICTOGRAPH

Name _____


Score _____

PGS:26

Match the pictographs with the information given in the tables.
Each picture represents 5 muffins.

1)

Sunday	40
Monday	30
Tuesday	35




2)

Sunday	10
Monday	25
Tuesday	20




3)

Sunday	45
Monday	30
Tuesday	15




4)

Sunday	20
Monday	25
Tuesday	35



5)

Sunday	40
Monday	20
Tuesday	25





MATCHING PICTOGRAPH

Name _____

Score _____


Answer key

PGS:26

Match the pictographs with the information given in the tables.
Each picture represents 5 muffins.

1)

Sunday	40
Monday	30
Tuesday	35




2)

Sunday	10
Monday	25
Tuesday	20




3)

Sunday	45
Monday	30
Tuesday	15



4)

Sunday	20
Monday	25
Tuesday	35



5)

Sunday	40
Monday	20
Tuesday	25

