




GLASS BEADS PICTOGRAPH






Name _____

Score _____

PGS:09

Linda purchased 300 marble glass beads to make necklaces and bead chains. The pictograph given below shows the number of glass beads she used to make each piece of jewellery.

 = 6 beads

18 inch Necklace	
32 inch Bead chain	
28 inch Bead chain	
40 inch Long bead chain	
20 inch Necklace	

1) How many glass beads were used to make the 20 inch necklace?

2) What is the total number of beads used to make the 32 inch and 28 inch bead chain?

3) How many more glass beads were used to make the long bead chain than 28 inch bead chain?

4) Which necklace carried more beads?

5) How many beads in all were used to make jewellery by Linda?



GLASS BEADS PICTOGRAPH


Name _____






Score _____

PGS:09

Answer key

Linda purchased 300 marble glass beads to make necklaces and bead chains. The pictograph given below shows the number of glass beads she used to make each piece of jewellery.

 = 6 beads

18 inch Necklace	
32 inch Bead chain	
28 inch Bead chain	
40 inch Long bead chain	
20 inch Necklace	

1) How many glass beads were used to make the 20 inch necklace?

24

2) What is the total number of beads used to make the 32 inch and 28 inch bead chain?

66

3) How many more glass beads were used to make the long bead chain than 28 inch bead chain?

18

4) Which necklace carried more beads?

20 inch Necklace

5) How many beads in all were used to make jewellery by Linda?

156