



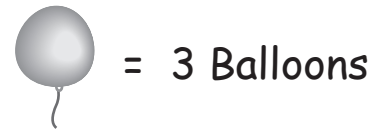
# BIRTHDAY BALLOONS PICTURE GRAPH

Name \_\_\_\_\_

Score \_\_\_\_\_

PGS:04

Sam uses 5 different colored balloons to decorate his house for his daughter's birthday celebration. Follow the key below and answer the following questions.



Pink	
Blue	
Green	
Yellow	
White	

1) How many Green balloons were used?

2) Which color balloon was most used?  
How many?

3) How many balloons were used in all to decorate the house?

4) How many more White balloons were used than Yellow?

5) Were the same number of Pink and Yellow balloons used?



# BIRTHDAY BALLOONS PICTURE GRAPH

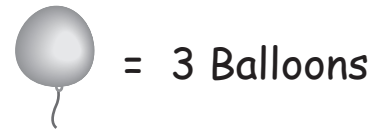
Name \_\_\_\_\_




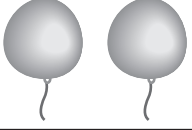
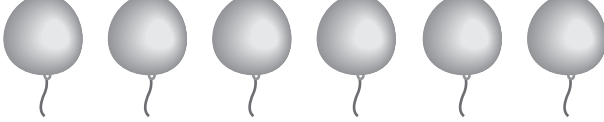
Score \_\_\_\_\_

PGS:04

## Answer key

Sam uses 5 different colored balloons to decorate his house for his daughter's birthday celebration. Follow the key below and answer the following questions.



Pink	
Blue	
Green	
Yellow	
White	

1) How many Green balloons were used?

15

2) Which color balloon was most used?  
How many?

Blue, 24

3) How many balloons were used in all to  
decorate the house?

75

4) How many more White balloons were used  
than Yellow?

12

5) Were the same number of Pink and Yellow  
balloons used?

No