








SEA SHELLS PICTURE GRAPH

Name _____

Score _____

PGS:01

Sarah and her friends collected different types of sea shells from the sea shore. Look at the table given below and answer the following.

Auger	
Scallop	
Cerith	
Sundial	
Nutmeg	

1) Which shell collected is fewer in number?

2) How many nutmeg shells did Sarah and her friends find?

3) Which shell is more, Cerith or Scallop?

4) Which type of shell collected is the maximum?

5) How many shells were collected in all?



SEA SHELLS PICTURE GRAPH






Name _____

Score _____

PGS:01

Answer key

Sarah and her friends collected different types of sea shells from the sea shore. Look at the table given below and answer the following.

Auger	
Scallop	
Cerith	
Sundial	
Nutmeg	

1) Which shell collected is fewer in number?

Auger

2) How many nutmeg shells did Sarah and her friends find?

7

3) Which shell is more, Cerith or Scallop?

Scallop

4) Which type of shell collected is the maximum?

Sundial

5) How many shells were collected in all?

29