



MATCHING SHAPES

Name _____


Score _____

TD15

Match the 3D names with its respective shapes.

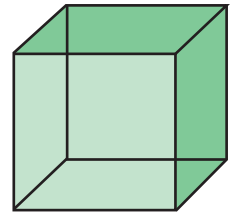
1)

Cylinder




2)

Triangular prism



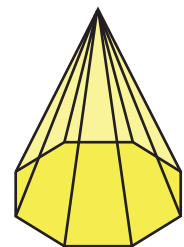
3)

Octagonal pyramid



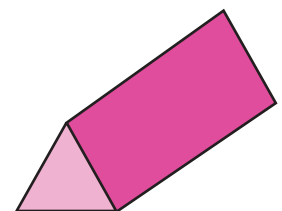
4)

Sphere



5)

Cube





MATCHING SHAPES

Name _____

Score _____


Answer key

TD15

Match the 3D names with its respective shapes.

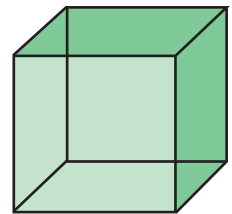
1)

Cylinder




2)

Triangular prism



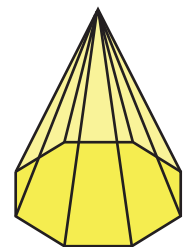
3)

Octagonal pyramid



4)

Sphere



5)

Cube

