



Line, Ray, Line segment, Plane




Name _____

Score _____

GSL14

Choose the correct option from the choices given below.

1) Which of the following is a line segment?

- a)  b)  c) 

2) Three or more lines which pass through the same point are called

- a) Parallel b) Perpendicular c) Concurrent d) Coplanar

3) Surface of a page in a book is called a

- a) Plane b) Line c) Line segment d) Ray

4) Two lines which do not meet at a point are called

- a) Concurrent b) Parallel c) Perpendicular d) Intersecting

5) Tip of a pencil

- a) Line segment b) Line c) Ray d) Point

6) Points that lie on a same line are called

- a) Collinear b) Coplanar c) Non-collinear d) Concurrent

7) A ruler is used to measure the _____ of a line segment.

- a) Area b) Volume c) Length d) Width






Answer key

GSL14

Choose the correct option from the choices given below.

1) Which of the following is a line segment?

- ~~a)~~  b)  c) 

2) Three or more lines which pass through the same point are called

- a) Parallel b) Perpendicular ~~c)~~ Concurrent d) Coplanar

3) Surface of a page in a book is called a

- ~~a)~~ Plane b) Line c) Line segment d) Ray

4) Two lines which do not meet at a point are called

- a) Concurrent ~~b)~~ Parallel c) Perpendicular d) Intersecting

5) Tip of a pencil

- a) Line segment b) Line c) Ray ~~d)~~ Point

6) Points that lie on a same line are called

- ~~a)~~ Collinear b) Coplanar c) Non-collinear d) Concurrent

7) A ruler is used to measure the _____ of a line segment.

- a) Area b) Volume ~~c)~~ Length d) Width